


NAME _____

SAHARA DESERT

ANSWER THE SAHARA DESERT TASK CARDS IN THIS BOX. USE EVIDENCE FROM THE READING, MAP, AND 360° SPHERES.



THE SAHEL

ANSWER THE SAHEL TASK CARDS IN THIS BOX. USE EVIDENCE FROM THE READING, MAP, AND 360° SPHERES.



AFRICAN SAVANNA

ANSWER THE AFRICAN SAVANNA TASK CARDS IN THIS BOX. USE EVIDENCE FROM THE READING, MAP, AND 360° SPHERES.




TROPICAL RAINFOREST

ANSWER THE TROPICAL RAINFOREST TASK CARDS IN THIS BOX. USE EVIDENCE FROM THE READING, MAP, AND 360° SPHERES.



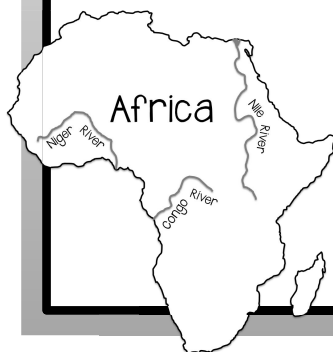
GREAT RIFT VALLEY

ANSWER THE GREAT RIFT VALLEY TASK CARDS IN THIS BOX. USE EVIDENCE FROM THE READING, MAP, AND 360° SPHERES.



CONGO RIVER

ANSWER THE CONGO RIVER TASK CARDS IN THIS BOX. USE EVIDENCE FROM THE READING, MAP, AND 360° SPHERES.



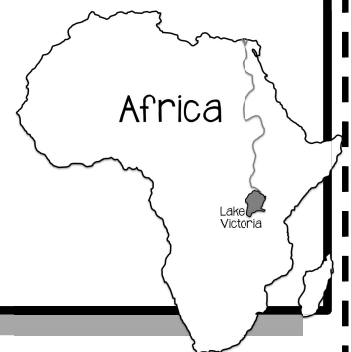
NILE RIVER

ANSWER THE NILE RIVER TASK CARDS IN THIS BOX. USE EVIDENCE FROM THE READING, MAP, AND 360° SPHERES.



LAKE VICTORIA

ANSWER THE LAKE VICTORIA TASK CARDS IN THIS BOX. USE EVIDENCE FROM THE READING, MAP, AND 360° SPHERES.



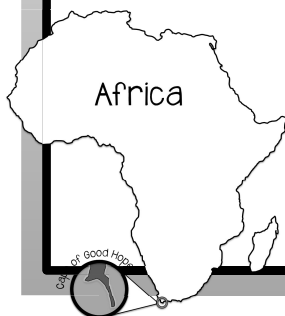
MOUNT KILIMANJARO

ANSWER THE MOUNT KILIMANJARO TASK CARDS IN THIS BOX. USE EVIDENCE FROM THE READING, MAP, AND 360° SPHERES.




CAPE OF GOOD HOPE

ANSWER THE CAPE OF GOOD HOPE TASK CARDS IN THIS BOX. USE EVIDENCE FROM THE READING, MAP, AND 360° SPHERES.




ATLAS MOUNTAINS

ANSWER THE ATLAS MOUNTAINS TASK CARDS IN THIS BOX. USE EVIDENCE FROM THE READING, MAP, AND 360° SPHERES.



KALAHARI DESERT

ANSWER THE KALAHARI DESERT TASK CARDS IN THIS BOX. USE EVIDENCE FROM THE READING, MAP, AND 360° SPHERES.



LAKE TANGANYIKA

ANSWER THE LAKE TANGANYIKA TASK CARDS IN THIS BOX. USE EVIDENCE FROM THE READING, MAP, AND 360° SPHERES.

